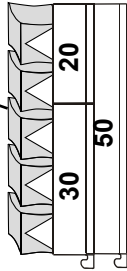
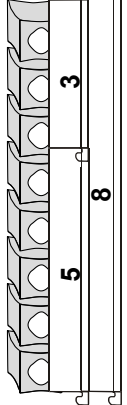



# Addacus Adding Bigger Numbers

START HERE

THE SUM	WHAT HAPPENS		THE ANSWER
	Tens	Units	
$\begin{array}{r} 35 \\ + 23 \\ \hline ? \end{array}$	$30 + 20 = \square$ 	$5 + 3 = \square$ 	$\begin{array}{r} 35 \\ + 23 \\ \hline 8 \quad (5 + 3) \\ + 50 \quad (30 + 20) \\ \hline 58 \end{array}$ 

Now try these. Use the Addacus and number strips to help you.

e.g.

$18$	$75$	$27$	$33$	$43$
$+ 41$	$+ 20$	$+ 62$	$+ 45$	$+ 25$
$\underline{\hspace{1cm}}$	$\underline{\hspace{1cm}}$	$\underline{\hspace{1cm}}$	$\underline{\hspace{1cm}}$	$\underline{\hspace{1cm}}$
$(8 + 1)$	$( + )$	$( + )$	$( + )$	$( + )$
$\underline{\hspace{1cm}}$	$\underline{\hspace{1cm}}$	$\underline{\hspace{1cm}}$	$\underline{\hspace{1cm}}$	$\underline{\hspace{1cm}}$
$(10 + 40)$	$( + )$	$( + )$	$( + )$	$( + )$
$\underline{\hspace{1cm}}$	$\underline{\hspace{1cm}}$	$\underline{\hspace{1cm}}$	$\underline{\hspace{1cm}}$	$\underline{\hspace{1cm}}$

Ask your tutor to help you check your answers on a calculator.

