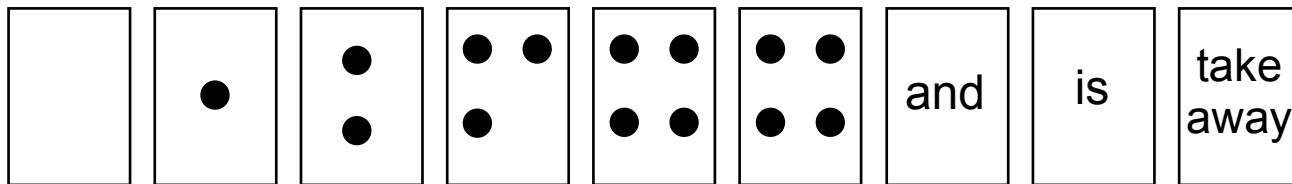
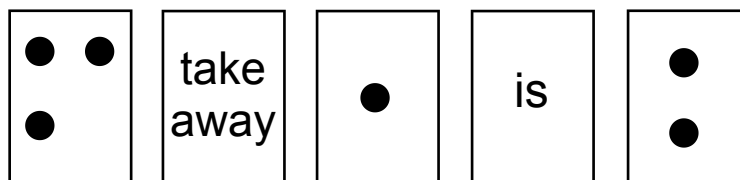


Fun with Number Sentences

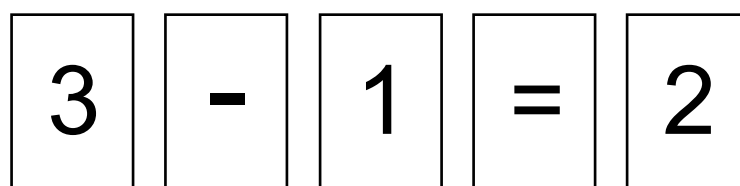

Take out these cards:



Place them like this:




Now turn them over like this:

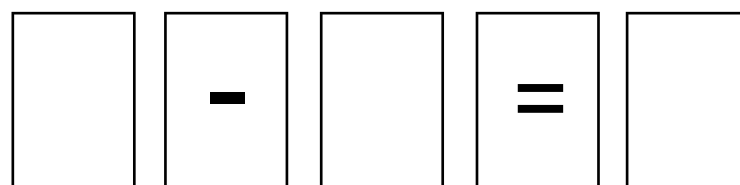


We write this: $3 - 1 = 2$

Take out these cards:



Fill in the missing numbers:
Turn the cards over to check.



We write this: $4 - 4 = 0$

Use your number strips or Addacus unit cubes.
Fill in the missing numbers or signs:

$$\square + 1 = 4$$

$$3 \square 1 = 4$$

$$4 - 4 = \square$$

$$2 + \square = 4$$

$$1 + 2 = \square$$

$$4 \square 3 = 1$$

$$4 - 1 = \square$$

$$4 + 0 = \square$$

$$4 - \square = 2$$

$$4 - 2 \square 2$$